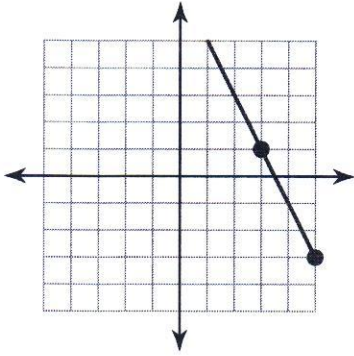


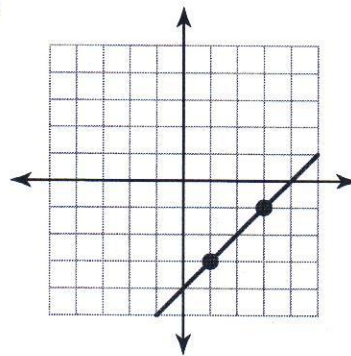
## Slope-intercept Form Worksheet

Find the slope of each line.

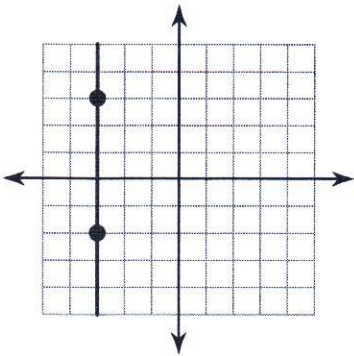
1)



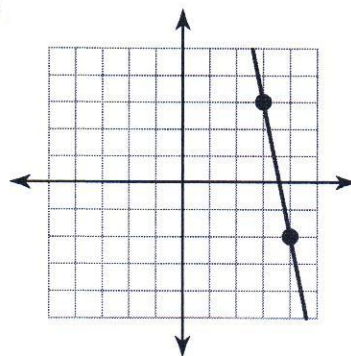
2)



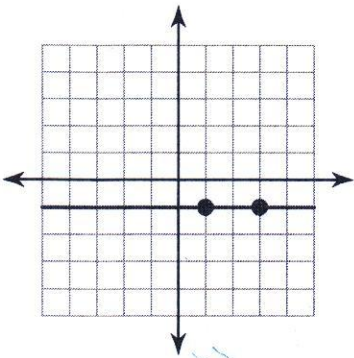
3)



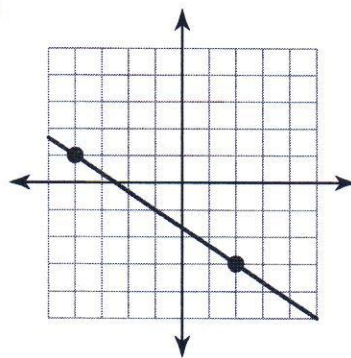
4)



5)



6)



Find the slope of the line through each pair of points.

7)  $(-14, -20), (-5, 9)$

8)  $(-1, 1), (5, -6)$

9)  $(15, 9), (-14, -9)$

10)  $(2, -12), (18, 15)$

Write the slope-intercept form of the equation of each line given the slope and y-intercept.

11) Slope =  $-1$ , y-intercept =  $2$

12) Slope =  $\frac{3}{2}$ , y-intercept =  $3$

13) Slope =  $3$ , y-intercept =  $-2$

14) Slope =  $\frac{3}{4}$ , y-intercept =  $1$

15) Slope =  $\frac{1}{2}$ , y-intercept =  $1$

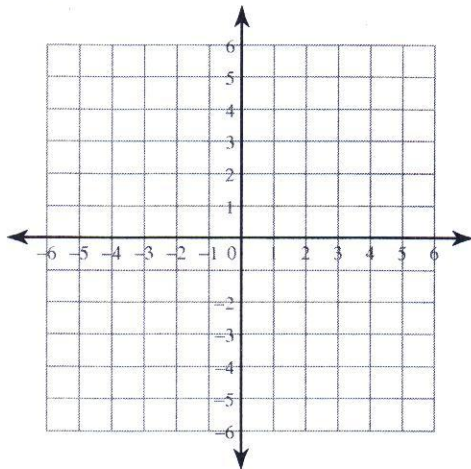
16) Slope =  $-\frac{2}{5}$ , y-intercept =  $0$

17) Slope =  $7$ , y-intercept =  $2$

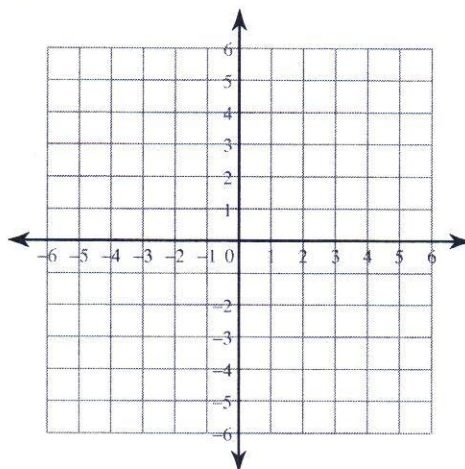
18) Slope =  $\frac{4}{3}$ , y-intercept =  $-4$

Sketch the graph of each line.

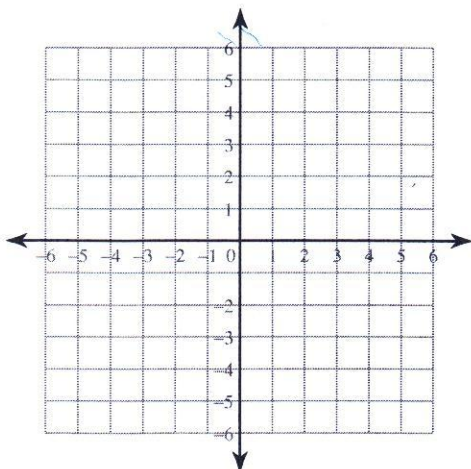
19)  $y = x - 4$



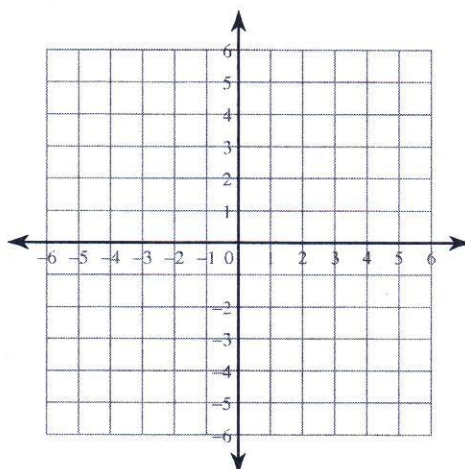
20)  $y = 5x - 1$



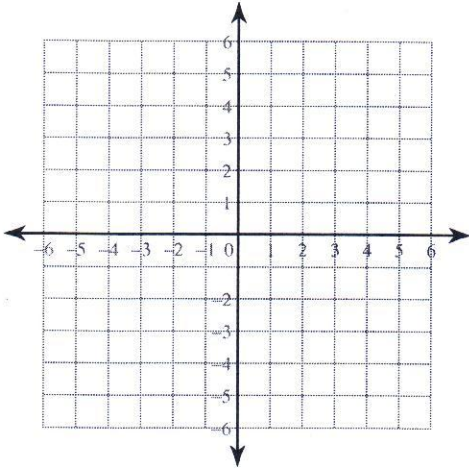
21)  $y = -4x + 5$



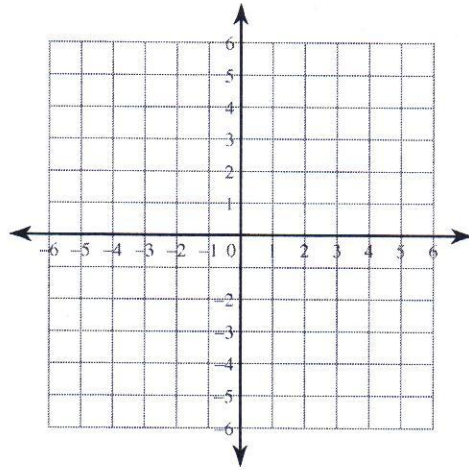
22)  $y = x + 5$



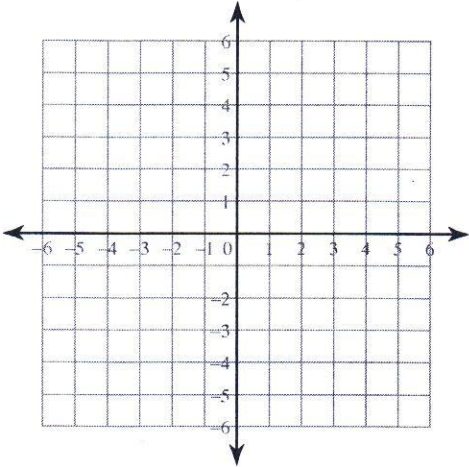
23)  $y = -3x + 3$



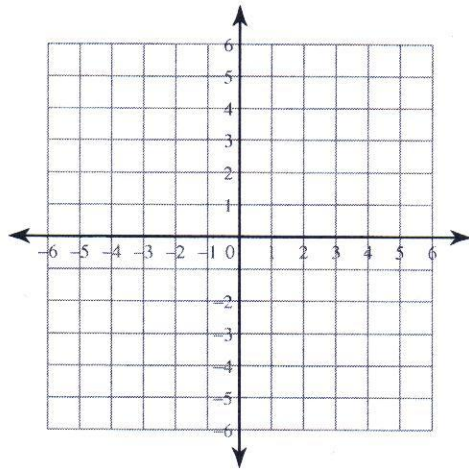
24)  $y = -2x - 2$



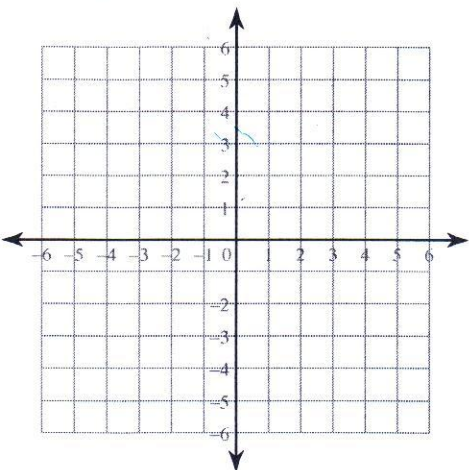
25)  $y = 2x - 4$



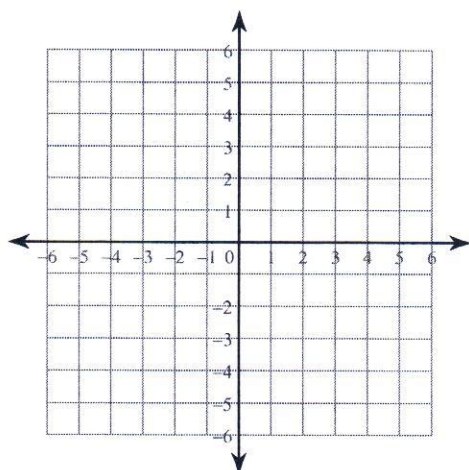
26)  $y = \frac{5}{2}x - 3$



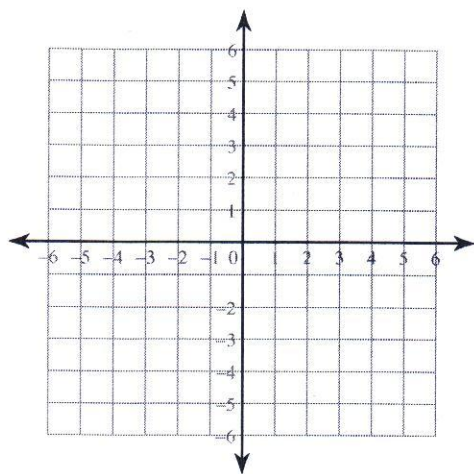
27)  $y = \frac{1}{2}x - 1$



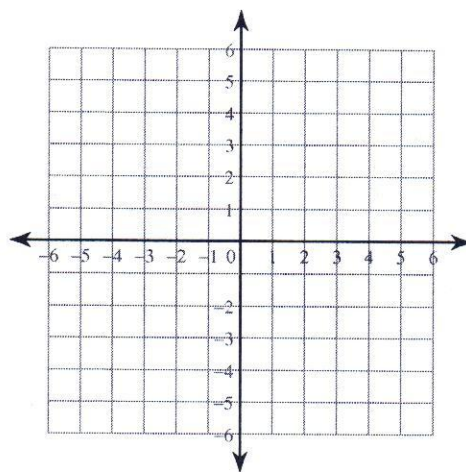
28)  $y = \frac{5}{3}x + 5$



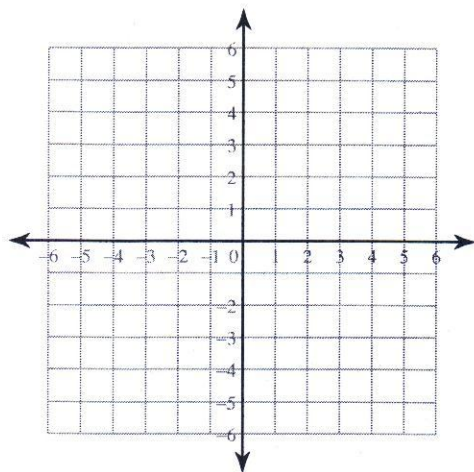
29)  $y = \frac{5}{2}x + 5$



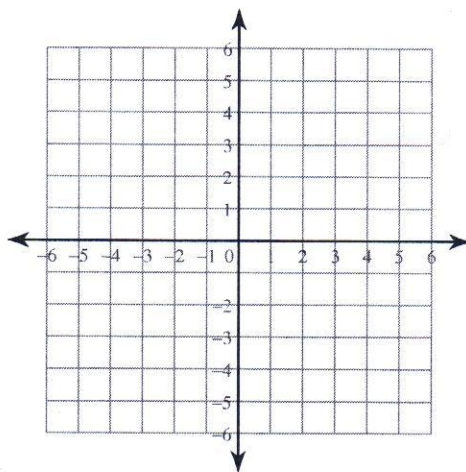
30)  $y = \frac{3}{2}x - 1$



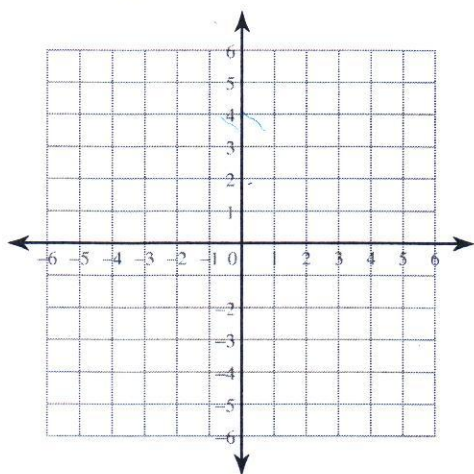
31)  $y = -\frac{3}{2}x - 2$



32)  $y = \frac{4}{5}x - 1$



33)  $y = -\frac{3}{5}x + 1$



34)  $y = -\frac{1}{4}x + 1$

